



















































满5加3位数2笔 (珠像)



扫一扫 查答案

姓名 _____ 计算题 _____ 错题 _____ 对题 _____ 成绩 _____

①	②	③	④	⑤	⑥	⑦	⑧	⑨	⑩
 -102	 120	 -600	 -208	 -300	 -142	 -410	 -630	 -100	 236
⑪	⑫	⑬	⑭	⑮	⑯	⑰	⑱	⑲	⑳
 473	 -173	 200	 402	 120	 -570	 121	 140	 341	 201
㉑	㉒	㉓	㉔	㉕	㉖	㉗	㉘	㉙	㉚
 -510	 316	 140	 231	 -128	 524	 -620	 -305	 403	 -105
㉛	㉜	㉝	㉞	㉟	㊱	㊲	㊳	㊴	㊵
 -164	 121	 722	 -640	 450	 -586	 160	 301	 102	 104
㊶	㊷	㊸	㊹	㊺	㊻	㊼	㊽	㊾	㊿
 106	 103	 604	 171	 -100	 244	 -183	 262	 -500	 -510